

Name:




1. Fill the 7 carriages with 11 people using 1 and 2



2. Fill the 7 carriages with 23 people using 4 and 3



3. Fill the 4 carriages with 7 people using 2 and 1



4. Fill the 6 carriages with 24 people using 5 and 3



5. Fill the 6 carriages with 20 people using 2 and 4




6. Fill the 7 carriages with 29 people using 2 and 5




Name:



1. Fill the 8 carriages with 42 people using 3 and 9




2. Fill the 8 carriages with 18 people using 3 and 2



3. Fill the 11 carriages with 39 people using 9 and 3



4. Fill the 9 carriages with 59 people using 6 and 7



5. Fill the 7 carriages with 47 people using 9 and 5

